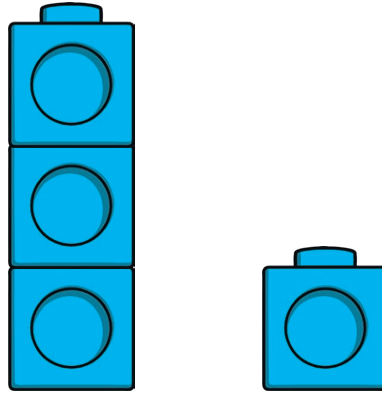


EYFS Maths Activity Mat: One, Two, Three

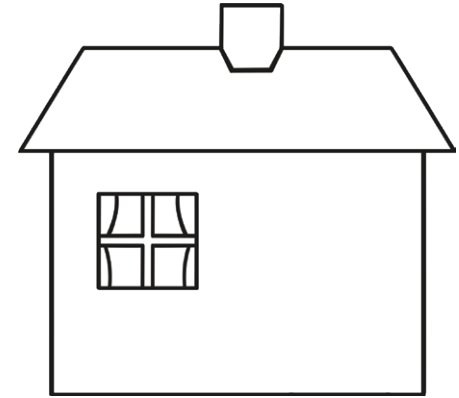
How many teddies are there?




Which tower has **3** cubes?
Circle it.



Can you draw **1** door on
the house?



Which dice shows **2**? Circle it.



1 2 3 4 5




EYFS Maths Activity Mat: Four

Draw **4** candles on the cake.



Which picture shows **4**?
Circle it.



Can you draw **4** legs
on the dog?



Can you circle **4** socks?




1 2 3 4 5



EYFS Maths Activity Mat: Five


Which picture shows **5**?
Circle it.




Can you give all the children
a party hat? How many hats
have you drawn?



Can you circle the hand that
is holding up **5** fingers?



Can you colour in **5** balloons?



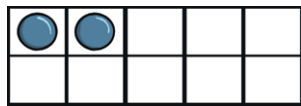

1 2 3 4 5



EYFS Maths Activity Mat: Sorting Into Groups


Can you circle the odd one out?

4

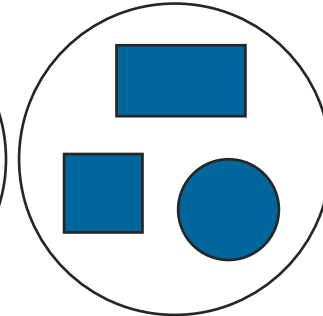



Colour the shape so that they are all sorted correctly.

red



blue

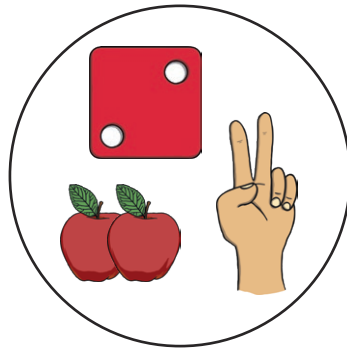
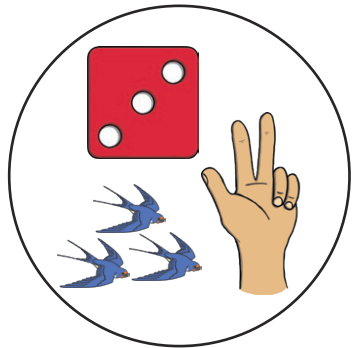


Where would you sort each object to? Join each object up to the correct basket.



Draw a line to the group you would sort the number 2 into.

2




1 2 3 4 5



EYFS Maths Activity Mat: Comparing Quantities of Identical Objects

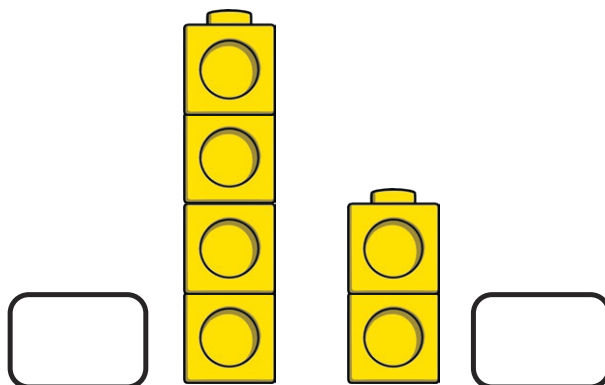
Do the dominoes have the **same number** of dots?




yes

no

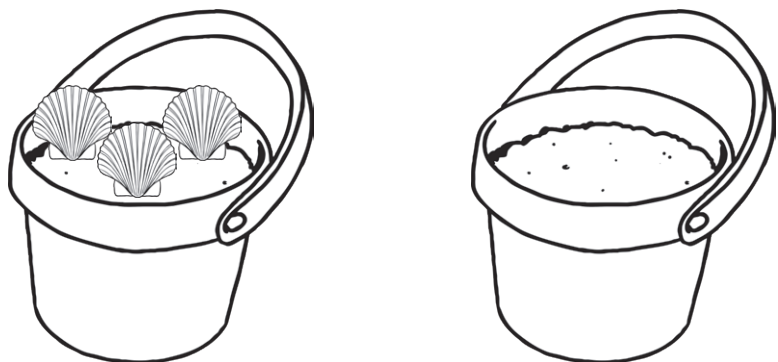
How many blocks are in each tower? Circle the tower with **fewer** blocks.



Which nest has the **most** eggs? Circle it.



Count the shells in the bucket. Draw some shells in the other bucket so they have **the same amount**.




1 2 3 4 5




EYFS Maths Activity Mat: Comparing Quantities of Non-Identical Objects

Which picture **does not** show 3? Circle it.



There are 3 forks.




Circle the picture that shows the **same number** of spoons.



Two monsters made a picnic. Which monster has the **most** food? Circle it.



The trees are growing fruit. How many pieces of fruit are on each tree?




Circle the tree that has the **fewest**.

1 2 3 4 5




EYFS Maths Activity Mat: One More


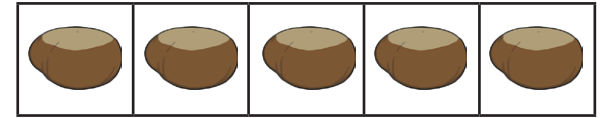
Draw **1 more** car. How many are there?




Add **1 more** button the gingerbread man. How many buttons does he have?



Which picture shows **1 more than 4**? Circle it.



Give the dog **1 more** spot. How many spots does he have?

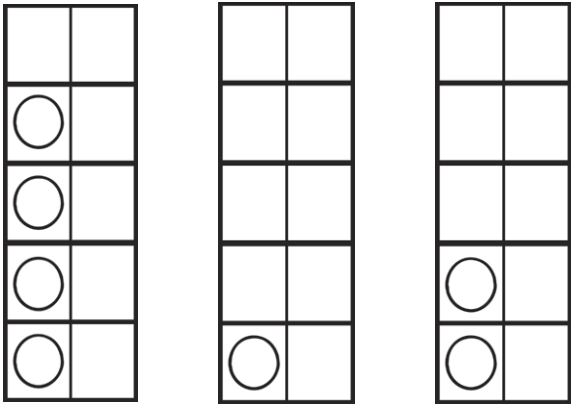


1 2 3 4 5




EYFS Maths Activity Mat: One Less


Colour the number that is **1 less than 3**.



Which group of apples show **1 less than 4**? Circle it.



There are **2** pieces of fruit in a basket. Draw **1 less** in the other basket.



Which picture shows **1 less than 5**?



1 2 3 4 5



EYFS Maths Activity Mat: My Day

What do you do in the morning? Circle it.



eat
lunch

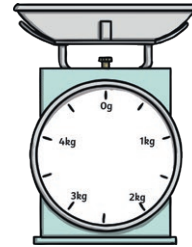



get
dressed




go to
sleep

What could you use to time **1 minute**? Circle it.



What do you see in the sky at night? Circle it.



sun



moon

1 2 3 4 5



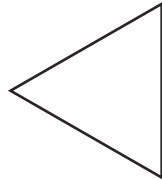



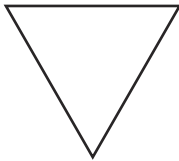
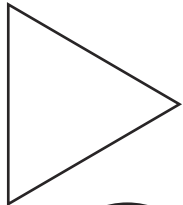
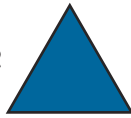
EYFS Maths Activity Mat: Shape, Space and Measures

Colour:

Circle



Triangle



Circle the dog that is **in** the kennel.



The bears are looking for their books. Join each bear to the correct book.



Circle the picture that comes next in the pattern.



1

2

3


4

5




EYFS Maths Activity Mat

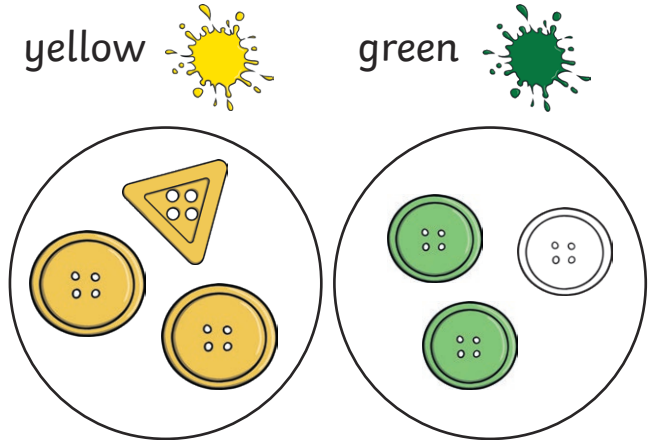
Draw **1 more** sock on the washing line. How many socks are there now?




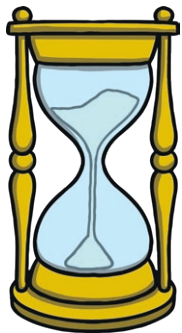
Which ice cream has **2** flakes?
Circle it.



Colour the button so that they are sorted correctly.



Circle the picture of a **clock**.




1 2 3 4 5




EYFS Maths Activity Mat

Which shape has **4** sides?
Circle it.




Which picture shows **one less than 2**? Circle it.



Which pot has the most flowers in? Circle it.



Draw **5** ducks in the pond.



1 2 3 4 5

